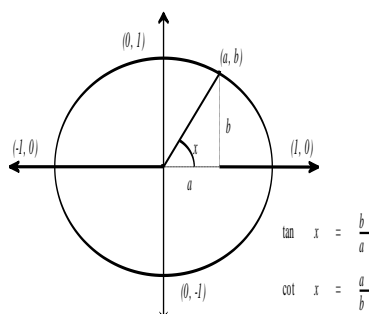


4.5b Graphing Tangent and Cotangent Functions

Let (a, b) be coordinates of points on the unit circle. For any given angle x , $\tan x = b/a$. This means that $y = \tan x$ is undefined whenever $a = 0$. For any given angle x , $\cot x = a/b$. This means that $y = \cot x$ is undefined whenever $b = 0$. Notice that it takes π radians for the values of the tangent and cotangent to make one complete cycle.

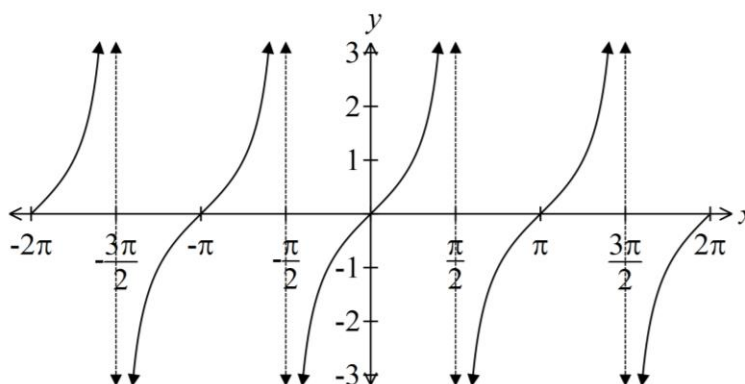


Graphing Tangent Functions:

The domain of $y = \tan x$ is the set of all real numbers except numbers of the form $\pi/2 + k\pi$, where k is an integer. The equations of the vertical asymptotes are $x = \pi/2 + k\pi$, where k is an integer.

Key points on the graph of $y = \tan x$:

x	$-\pi/2$	$-\pi/4$	0	$\pi/4$	$\pi/2$
$y = \tan x$	undef.	-1	0	1	undef.



To graph $y = a \tan[b(x - c)] + d$:

- Start with the three key points on the graph of $y = \tan x$ and the equations of the asymptotes.
- Find three key points and the asymptotes for $y = a \tan[b(x - c)] + d$ by:
 - dividing each x -coordinate by b and adding c . (Treat the equations of the asymptotes like x -coordinates.)
 - multiplying each y -coordinate by a and adding d .
- Sketch one cycle of $y = a \tan[b(x - c)] + d$ through the three new points and approaching the new asymptotes.

★ The period of $y = a \tan[b(x - c)] + d$ and $y = a \cot[b(x - c)] + d$ is π/b rather than $2\pi/b$.

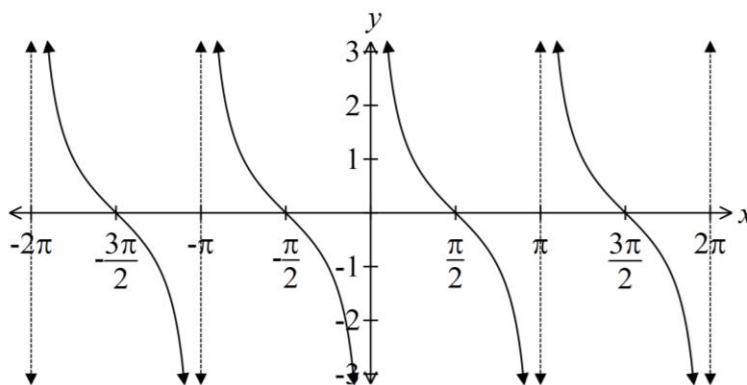
Graphing Cotangent Functions:

The domain of $y = \cot x$ is the set of all real numbers except numbers of the form $k\pi$, where k is an integer.

The equations of the vertical asymptotes are $x = k\pi$, where k is an integer.

Key points on the graph of $y = \cot x$:

x	0	$\pi/4$	$\pi/2$	$3\pi/4$	π
$y = \cot x$	undef.	1	0	-1	undef.



To graph $y = a \cot[b(x-c)] + d$:

1. Start with the three key points on the graph of $y = \cot x$ and the equations of the asymptotes.
2. Find three key points and the asymptotes for $y = a \cot[b(x-c)] + d$ by:
 - a. dividing each x -coordinate by b and adding c . (Treat the equations of the asymptotes like x -coordinates.)
 - b. multiplying each y -coordinate by a and adding d .
3. Sketch one cycle of $y = a \cot[b(x-c)] + d$ through the three new points and approaching the new asymptotes.

Examples: Graph the following functions. Find the period and the equations of the asymptotes of each.

$$y = \tan\left(\frac{1}{2}x\right)$$

$$y = 2 \cot\left(x + \frac{\pi}{3}\right)$$

$$y = 3 \tan\left(2x + \frac{\pi}{2}\right) + 1$$

$$y = 2 \cot\left[3\left(x - \frac{\pi}{6}\right)\right] - 1$$